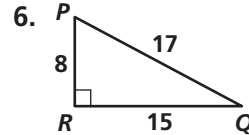
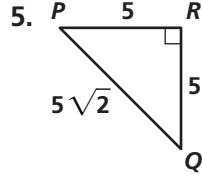
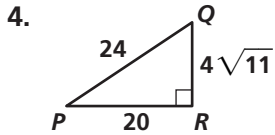
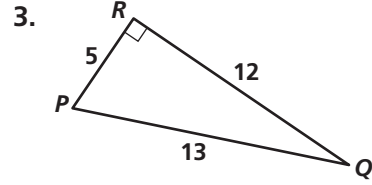
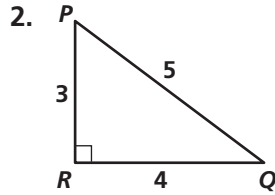
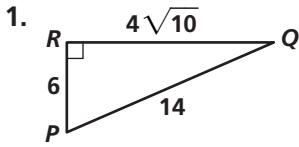


Practice 9-2

Sine and Cosine Ratios

Write the ratios for $\sin P$ and $\cos P$.



Find the value of x . Round lengths of segments to the nearest tenth and angle measures to the nearest degree.

