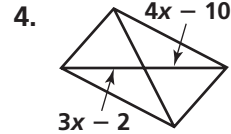
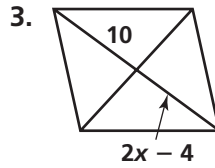
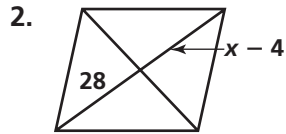
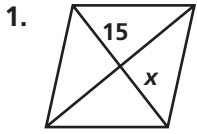


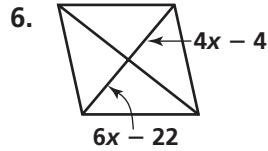
Practice 6-2

Properties of Parallelograms

Find the value of x in each parallelogram.

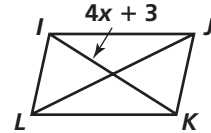
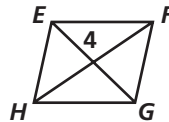
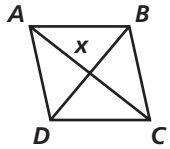


5. $AC = 24$

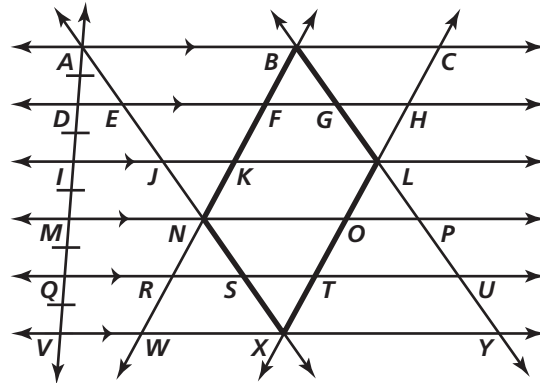


7. $x = EG$

8. $IK = 35$

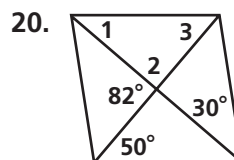
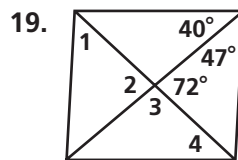
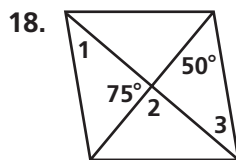
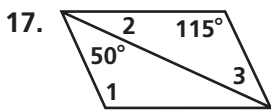
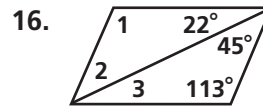
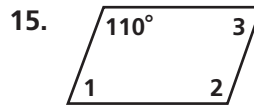
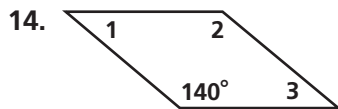
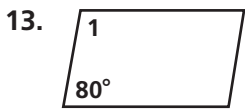


If $AE = 17$ and $BF = 18$, find the measures of the sides of parallelogram $BNXL$.

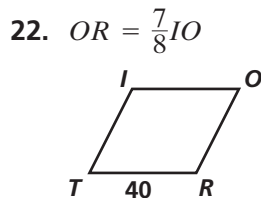
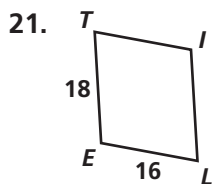


9. BN
10. NX
11. XL
12. BL

Find the measures of the numbered angles for each parallelogram.



Find the length of \overline{TI} in each parallelogram.



23. $TR = 14, ME = 31$

24. $IE = 6, GT = 8$

